

**Inspiration Sr. Sec. School**  
**Holiday Homework (Summer Break)**  
**Class-V**

**English**

- Q1. Do daily one page writing in English Cursive Writing book.  
Q2. Do comprehension passage on page 180 Question 1,3,4 and page 182, Question 1,2,4,6 in your notebook.  
Q3. Read your small English Literature Story book and write summary of any two stories on your own.  
Make one separate notebook for holiday homework.

**Hindi**

- 1- सुलेख पुस्तक में, 1 से लेकर 15 पृष्ठ (page) तक सुंदर लेख में लिखें।  
2- पृष्ठ (page) न० 88 से ' समय का सदुपयोग ' विषय पर निबंध लिखें।( निबंध हिंदी व्याकरण की कापी में लिखें।)

**Science**

1. Make a first aid box using all the materials available at home. Write down the names of material, kept inside, on the lid of the box.  
2. Paste the pictures of 15 Indian whole spices on a chart and write their Hindi and English names.

**Social Science**

1. On a chart paper draw the language of a map, refer to page no.3 of your Social Studies textbooks.  
2. On a political map of India, mark all the states and capitals. Paste this map on the blank side of your SST notebooks. Write the names of all the states and capitals on the ruled side.  
3. Note down the temperature of your city/ town continuously for two weeks. Do it on an A4 sheet and put your name and class at the back of it.

**Computer Science**

Collect information about any 5 voice assistant tools. Write 2 lines about them and paste their pictures.  
(Do in A4 sheet paper)

**Mathematics**

**Note-** Do the given work in separate note book.

**Q1. Read the given numerals and write their number names.**

- a. 2,00,000                      b. 9,00,070

**Q2. Write the numerals for the following.**

- a. Twelve lakh four hundred five.  
b. Three hundred ten thousand four.

**Q3. Write the face value and place value of the underlined digits?**

- a. 47,32,695                      b. 39,60,780

**Q4. Write the given numbers in the descending order.**

- a. 852,632;830,632;845,632;829,632  
b. 3,33,508;3,26,731;3,33,961;3,26,407

**Q5. Find a number to complete the blanks. Choose from the box.**

50,330	46,800	20,272	51,314	19,310	20,710
--------	--------	--------	--------	--------	--------

- a.  $46,812 < \square < 51,214$   
b.  $1,9221 < \square < 19,416$   
c.  $54,703 > \square > 50,654$   
d.  $20,713 > \square > 20,601$

**Q6. Write the successor and predecessor of 3,10,000.**

**Q7. Write the number names for the given numbers according to the Indian system of numeration.**

- a. 5,29,607                      b. 3,17,00,009

**Q8. Put commas according to the International system of numeration and write the following in words.**

- a. 38675260                      b. 80000000

**Q9. Write the numerals for the following.**

- a. Five crores eighty lakhs five hundred four  
b. Thirteen lakhs thirteen

**Q10. Write the expanded form of the given numbers.**

- a. 14,857,054                      b. 4,19,26,415

**Q11. Write the next two numbers in each series.**

- a. 63,198;63,199                      b. 7,21,583;7,21,593

**Q12. Fill in the blanks.**

- a. 1 more than 4,31,26,676 is \_\_\_\_\_  
b. 200 more than 8,63,15,835 is \_\_\_\_\_  
c. 50 less than 80,35,300 is \_\_\_\_\_  
d. 7000 added to 1,372,315 is \_\_\_\_\_  
e. 2 lakh less than 5,70,51,010 is \_\_\_\_\_

**Q13.** Write the sum of the greatest 6- digit number and the smallest 7- digit number.

**Q14. Round off to the nearest tens.**

a. 161

b. 5,409

**Q15. Round off the following numbers to the nearest thousands.**

a. 5,16,497

b. 97,997

**Q16. Find the sum.**

a.  $7,090 + 9,82,009$

b.  $65,709 + 33,265$

**Q17. Find the difference.**

a.  $64,336 - 6,464$

b.  $97,714 - 89,634$

**Q18. Solve the following.**

a. Find the difference when the minuend is 3,00,10,020 and the subtrahend is 4,13,629.

b. Subtract 8,47,685 from 90,08,875.

**Q19. Find the missing digits in each of the following.**

a. TL L TTh Th H T O

4 9 7 7 1 8 4  
+ 3 \_ \_ \_ \_ 9

-----  
-----

b. TL L TTh Th H T O

2 1 2 0 1 3 5  
- \_ \_ 6 5 \_ \_

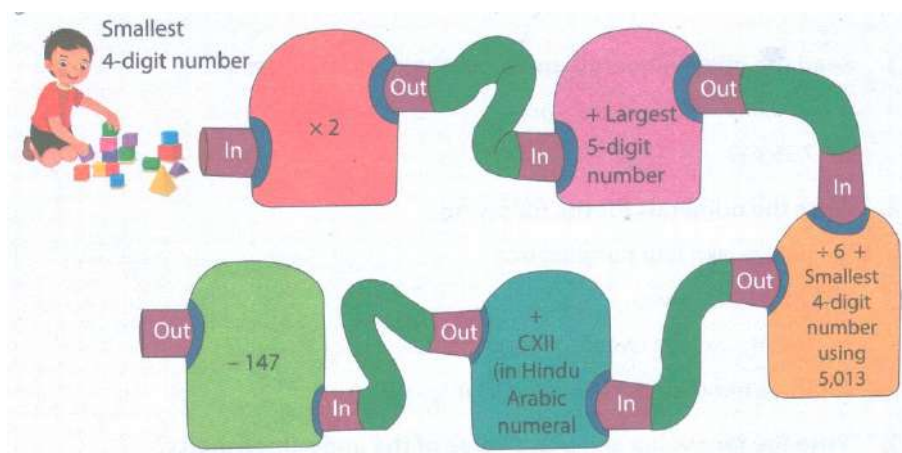
-----  
-----

**Q20. Solve the following-**


a. The sum of two numbers is 49,07,584. If one of the numbers is 34,69,396 find the other number.

b. A Computer and a printer together cost Rs. 2,74,760. If the computer cost Rs. 1,59,899, find the cost of the printer.

**Q21. Visit to a number factory.**



**Q22. Study the given table and list the planets in descending order of their approximate radius. What do you observe?**




Planet	Radius in kms.( Approx.)
Neptune	2,46,22,000
Saturn	5,82,32,000
Venus	60,52,000
Mercury	24,40,000
Earth	63,71,000
Jupiter	6,99,11,000
Uranus	2,53,62,000
Mars	33,90,000








### Sanskrit

नोट- निम्नलिखित दिए गए कार्य को अपनी संस्कृत कॉपी में करें।

चित्र बनाकर निम्नलिखित चित्रों के नाम संस्कृत, हिंदी और अंग्रेजी भाषाओं में लिखिए।

चित्र	संस्कृत	हिंदी	अंग्रेजी
	कमलम्	कमल	Lotus
	खर्जूरः	खजूर	Dates

	गजः	हाथी	Elephant
---	-----	------	----------

	घटः	घड़ा	Pitcher
	चक्रम्	पहिया	Wheel
	छत्रम्	छाता	Umbrella
	जलम्	जल	Water
	झरः	झरना	Waterfall
	डमरः	डमरु	Pellet Drum
	तरुः	पेड़	Tree