

INSPIRATION PUBLIC SCHOOL
Holiday Homework (2024-2025)
CLASS: IV

Science

Prepare a diet chart (for all the meals of a day) for 15 days and classify the food into healthy and unhealthy food and prepare a tablet.

Note: Do the above work in a scrapbook.

Social Science

- Read chapter 14 **Transport** of your Learn well social science book .
- Mark all the states and their capitals in an outline map of India. Paste it in your social science notebook. Along with it write and learn all the states and capitals in your social science notebook.
- Make a small model of a desert.

Computer

Collect the following pictures and paste them on A4 pastel sheet.

- **Generations of computer**
- **Evolution of computers**

Hindi

- (उमंग व्याकरण पुस्तक से)

पाठ-16 अपठित गद्यांश (page no 76 से नंबर 2 का अपठित गद्यांश हिंदी व्याकरण कॉपी में

गद्यांश और प्रश्न/उत्तर पूरा कॉपी में करें |

- पाठ- 18 अनुच्छेद लेखन (राष्ट्रीय पक्षी 'मोर') page no 87 हिंदी व्याकरण कॉपी में करें |
- लेखन- पाती-(सुलेख)

लेखन-पाती पुस्तिका में रोज एक पृष्ठ सुंदर लेख में करें |

Maths

- Do the given work in separate notebook.

Q1. Write the place value and the face value of each digit of the given 4-digit numbers

a. 6,789

b. 3,475

Q2. Write the expanded form of the given numbers.

a. 5,753

b. 7,809

Q3. Write the short form.

a. $8,000 + 7 =$

b. $3,000 + 40 + 9 =$

Q4. Fill in the blanks.

a. 1,000 and 1 more is

b. 1 added to the successor of 988 is

c. 6,275 and 300 more is

d. 4,000 less than 8,976 is

Q5. Write the successors of the given numbers.

23,799

2,199

Q6. Write the greatest and the smallest 4- digit numbers using 7, 3, 8 and 0

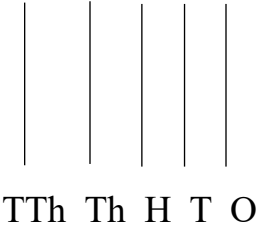
Q7. What should be added to 965 to get 1,500?

Q8. Represent each given number on the abacus.

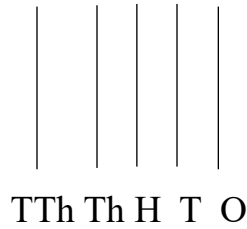
a. 90,609

b. 4,45,210

a.



b.



Q9. In each of the following numbers, put commas, and write their names, according to the Indian system of numeration.

a. 300470

b. 536709

Q10. In each of the following numbers, put commas, and write their names, according to the International system of numeration.

a. 317150

b. 630070

Q11. Write the numeral for:

a. One lakh fifty- seven thousand three hundred twelve.

b. Three hundred forty-five thousand six hundred fifty-six.

c. Eight hundred thirty-two thousand four hundred ten

d. Twenty-six thousand five hundred three.

e. Four lakh thirty-five thousand five.

Q12. Write the expanded form of the given numbers.

a. 3,48,905

b. 6,07,893

Q13. Write the numeral for the following expanded forms.

a. $4,00,000 + 30,000 + 2,000 + 10 + 2 =$

b. $2,00,000 + 400 =$

Q14. Round off the given numbers to the nearest tens.

a. 163

b. 1,324

Q15. Round off the given numbers to the nearest hundreds.

a. 2,354

b. 360

Q16. Round off the given numbers to the nearest thousands.

a. 34,567

b. 6,00,732

Q17. Write the following Hindu-Arabic numerals as Roman numerals.

a. 655

b. 999

Q18. Write the following Roman numerals as Hindu-Arabic numerals.

a. XXXIX

b. DCCXXV

Q19. Fill in the boxes.

a. $183 + 738 =$ $+ 183$

b. $3757 + 0 =$

Q20. What will be the sum of:

a. $35,689 + 4,156 + 5,68,915$

b. $4,156 + 5,68,915 + 35,689$

Q21. Story Sums.

- a. Koyam is a small town in Kerala. There are 89,715 males and 73,209 females in Koyam. What is the total number of males and females in the town?
- b. A watch company produces 4,560 watches in a month. If the company sells 3,987 watches how many watches are left unsold?

Q22. Fill in the boxes.


- a. $3,467 - 0 = \boxed{}$
- b. $4,692 - 1 = \boxed{}$
- c. $5,093 - \boxed{} = 5,093$
- d. $6,758 - \boxed{} = 0$

Q23. a. Find the difference between the largest 6-digit number and the smallest 5-digit number.

b. The sum of two numbers is 90,817. If one number is 43,529, what is the other number?

c. The difference between two numbers 36,725. If the smaller number is 18,978, find the greater number.

Q24. Colour the balloons with even numbers in blue and the balloons with odd numbers in green.



The purple-headed mountain,
The river running by,
The sunset, and the morning,
That brightens up the sky;
He gave us eyes to see them,
And lips that we might tell,
How great is God Almighty.

Answer the following

1. Who made this world?
2. What things made this world beautiful?
3. Can you tell three things about the world?
4. Which thing did you like the most in this poem?
5. Find and write the synonym of the following from the above poem.
a) sight b) light up

3. Circle the 2 synonyms for each set of words.

- | | | | |
|------------|---------|---------|-------------|
| 1. toasty | chilly | cool | comfortable |
| 2. walk | crawl | stroll | run |
| 3. argue | scare | confuse | frighten |
| 4. bravery | honesty | courage | winner |
| 5. cook | drink | eat | munch |
| 6. record | paint | draw | sketch |

4. Write a synonym for each word.

1. thin _____
2. tiny _____

3. store _____

4. fall _____

5. see _____

6. friendly _____

7. tasty _____

8. silent _____

9. smelly _____

10. smile _____

11. think _____

12. break _____

5. Write one page of cursive writing daily.