

**Inspiration Sr. Sec. School**  
**Holiday Homework (Summer Break)**  
**Class-III**

**Subject – Mathematics**

**A. Choose the correct options:**

1. What is the place value of the 8 in the number **3686**.

- a) 80       b) 8       c) 8000

2. The largest 4- digit even number is the following:

- a) 9000       b) 9998       c) 9999

3. The smallest 4-digit number formed by the digit 5,0,7,9 is

- a) 5097       b) 5079       c) 9705

4. A three digit number is to be formed from three different digits. What should be filled in the 

|   |  |   |
|---|--|---|
| 7 |  | 8 |
|---|--|---|

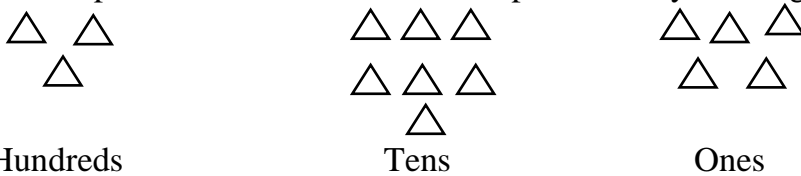
 blank from the given options to make it the biggest number?

- a) 4       b) 8       c) 6

5. 56 is written in Roman Numerals as

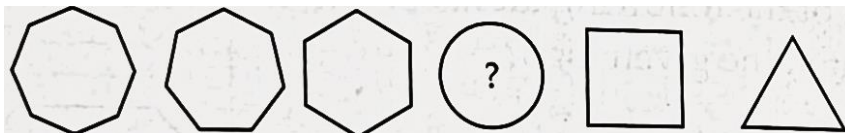
- a) XXXXXVI       b) LVI       c) LIV

6. If  $\triangle$  represents 1, then the number represented by the diagram is



- a) 375       b) 357       c) 573

7. Find the missing figure which completes the series below.



- a)
- b)
- c)

8. Complete the pattern:





9. If day after tomorrow will be Tuesday, then day before yesterday was

- a) Saturday     b) Friday     c) Sunday

10. Find the value of P, Q, R, S respectively.

$$\begin{array}{r}
 \phantom{+} 2 \phantom{0} 3 \phantom{0} R \phantom{0} S \\
 + \phantom{0} P \phantom{0} Q \phantom{0} 7 \phantom{0} 8 \\
 \hline
 5 \phantom{0} 9 \phantom{0} 1 \phantom{0} 0
 \end{array}$$

- a) 2, 3, 5, 3     b) 2, 3, 5, 1     c) 3, 5, 3, 2

11. Answer the following:

a) \_\_\_\_\_ comes just before 870.

b) \_\_\_\_\_ comes just after 489.

c) \_\_\_\_\_ comes between 919 and 921.

d)  $943 = \square \text{ H} + \square \text{ T} + \square \text{ O}$

e)  $3 \text{ hundreds} + 7 \text{ tens} = \square$

f) \_\_\_\_\_ is the smallest amongst 87 78 81

g) \_\_\_\_\_ is the biggest amongst 98 89 91

h)  $17 + 5 = \square$

i)  $990 + \square = 990$

j)  $6229 + \square = 6230$

12. Write the number names for the given numbers.

- a) 7912                      b) 8707                      c) 2330

13. Write the numbers in ascending order.

a) 6134, 7143, 7413, 4137, 6143

b) 8007, 7008, 7080, 8070, 8700

c) 7128, 4127, 1742, 4721, 7821

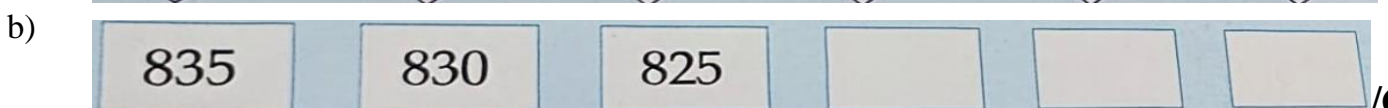

14. Write the numbers in descending orders.

a) 7785, 5877, 7857, 8577, 5787

b) 3892, 3961, 3691, 4001, 4100

c) 2506, 2650, 2056, 2755, 2575

15. Complete the sequence.





**16. Write the roman numerals for the following:**

- a) 15                                  b) 34                                  c) 54  
 d) 65                                  e) 48                                  f) 93

**17. Write the following in Hindu -Arabic numerals:**

- a) VII                                  b) XLIX                              c) XXVII  
 d) XII                                  e) XVCII                              f) LXV

**18. Add the following:**

|    |   |    |   |    |   |
|----|---|----|---|----|---|
| 1. | $\begin{array}{r} 4590 \\ + 3241 \\ \hline \end{array}$ | 3. | $\begin{array}{r} 6385 \\ + 2462 \\ \hline \end{array}$ | 5. | $\begin{array}{r} 7864 \\ + 2929 \\ \hline \end{array}$ |
| 2. | $\begin{array}{r} 1941 \\ + 4382 \\ \hline \end{array}$ | 4. | $\begin{array}{r} 8050 \\ + 1770 \\ \hline \end{array}$ | 6. | $\begin{array}{r} 1964 \\ + 1465 \\ \hline \end{array}$ |

**19. Subtract the following:**

|    |   |    |   |    |   |
|----|---|----|---|----|---|
| 1. | $\begin{array}{r} 7810 \\ - 3569 \\ \hline \end{array}$ | 3. | $\begin{array}{r} 5924 \\ - 1779 \\ \hline \end{array}$ | 5. | $\begin{array}{r} 7320 \\ - 4749 \\ \hline \end{array}$ |
| 2. | $\begin{array}{r} 8640 \\ - 6480 \\ \hline \end{array}$ | 4. | $\begin{array}{r} 9601 \\ - 4379 \\ \hline \end{array}$ | 6. | $\begin{array}{r} 3824 \\ - 1282 \\ \hline \end{array}$ |

**20. Fill in the boxes:**

a)  $8 \times 9 =$

b)  $6 \times 8 =$

c)  $11 \times 6 =$

d)  $5 \times 7 =$

e)  $10 \times 9 =$

f)  $12 \times 4 =$

g)  $9 \times 6 =$

h)  $7 \times 7 =$

i)  $4 \times 8 =$

j)  $7 \times 9 =$

**21. Solve the word problems:**

a) Radha had 269 envelopes and she bought 163 more. How many envelopes does she have now?

b) Our school library has 5634 Hindi books and 1598 English books. How many books are there in the library?

**Subject – Social Studies**

1. Create a model of a hut using ice-cream sticks and straw.
2. Make a chart on our national symbols .
3. Write states of India and their capitals.

**Subject - Computer Science**

Collect the following pictures and paste them on A4 pastel sheet

- Input and Output devices.
- Storage devices.

**Subject – English**

**1. Read the passage carefully and answer the Following questions:**

A mammal is an animal that breathes air, has a backbone and grows hair at some point during its life. In addition, all female mammals have glands that can produce milk. There are 5,000 species or kinds of living mammal. Mammals range in size from a tiny bat to a huge whale. Mammals are warm- blooded. This allows mammals to live in a wide range of climates. They have highly developed brains. Their brain allows mammals to learn from experience and adapt their behavior. Most mammals live on land-on the ground, in trees, or even underground. Some mammals –including otters, beavers, and seals- live on land and in the water. Whales, dolphins and manatees are mammals that spend their whole life in water.

1. What does a mammal breathe?
2. What can a female mammal produce?
3. What is the size of a mammal?
4. What do mammals like whales and dolphin live?
5. In what temperature can a mammal survive?
6. Write antonyms of the given words from the passage:  
a) cold- \_\_\_\_\_ b) many- \_\_\_\_\_

**2. Read the poem carefully and answer the questions:**

When the earth is turned in spring  
The worms are fat as anything

And birds come flying all around  
To eat the worms right off the ground

They like worms just as much as I  
Like bread and milk and apple pie.

And once, when I was very young  
I put a worm right on my tongue.

I didn't like the taste a bit.  
And so I didn't swallow it.

But oh, it makes my Mother squirm  
Because she thinks I ate that worm!

**Answer the following questions:**

1. When are the worms fat?
2. Who eat the worms?
3. Write the meaning of 'squirm'.
4. Why does the mother squirm?
5. Name the food items which has been mentioned in the poem?
6. Fill in the blanks:

The poet is talking about the \_\_\_\_\_ in the poem. They get fat in \_\_\_\_\_ season. They are like \_\_\_\_\_ and \_\_\_\_\_ for the birds. The poet doesn't like the \_\_\_\_\_ of the worms. His mother thought that he has \_\_\_\_\_ the worm.

7. Write the opposites of the following from the passage:

a) Thin \_\_\_\_\_ b) wrong \_\_\_\_\_ c) old \_\_\_\_\_

**3. Write 1 page daily of cursive writing book.**

**4. Choose the word that is most nearly opposite in meaning to the word in capital letters.**

- |             |              |          |              |
|-------------|--------------|----------|--------------|
| 1. UP       | A. down      | B. above | C. inside    |
| 2. GIVE     | A. share     | B. take  | C. release   |
| 3. LARGE    | A. huge      | B. big   | C. small     |
| 4. UNHAPPY  | A. glad      | B. sad   | C. calm      |
| 5. ANGER    | A. happiness | B. rage  | C. stupidity |
| 6. MIDNIGHT | A. evening   | B. noon  | C. yesterday |
| 7. FAT      | A. short     | B. thick | C. skinny    |

8. BUY

A. sell

B. have

C. hold

9. QUIT

A. stop

B. end

C. start

10. TIGHT

A. free

B. loose

C. firm

### Subject – Science

Take a whole chart paper and write the safety rules which we should follow:

- a. At school,
- b. In the playground.

### Subject – Hindi

#### उमंग पुस्तक से

पाठ 19— निबंध लेखन (मेरा प्यारा घर) पृष्ठ सं० 71 (हिंदी व्याकरण कॉपी में करें)

पाठ 20— कहानी लेखन (करके देखो) पृष्ठ सं० 76

**बिंदु**— प्यासा कौवा। एक घड़ा दिखा। पानी था कम।। घड़े में पत्थर डाले। पानी ऊपर आया। कौए ने प्यास बुझाई। (अब बिन्दु देखकर कहानी पूरी लिखो और कहानी का शीर्षक भी लिखिए।)

#### लेखन—पाती सुलेख

लेखन—पाती पुस्तिका में रोज एक पृष्ठ सुंदर लेख में करें।